

APS

Aff. No. - 531572
Aff. to C.B.S.E. New Delhi
Delhi Road, Near Flyover, Ch. Dadri
Mob. 8708451933, 9991038930 | apsdadri@gmail.com
SR. SEC. SCHOOL

MY Winter Vacation Work

Winter Vacation Start From 1/01/2024 To 15/01/2024

Class- 3rd

Subject- English

Word Search Puzzle

1) Find hidden words in horizontally and vertically.

m	w	u	v	b	e	w	o	r	d
o	h	u	k	e	e	j	a	x	d
y	i	s	b	a	i	r	t	x	c
t	c	k	l	u	t	p	h	s	x
c	h	d	x	t	h	r	o	u	e
e	w	j	h	i	e	c	u	r	p
w	a	r	m	f	r	a	g	e	q
b	e	e	n	u	i	j	h	n	j
g	a	v	m	l	r	e	a	d	y
z	d	i	f	f	e	r	e	n	t

1) though

2) word

3) different

5) which

6) either

7) beautiful

9) been

10) ready

2) Action Noun collection Crossword

Fill the puzzles with the actions that go with the nouns:-

The crossword puzzle grid consists of 10 numbered starting points for words:

- 1: Down, 8 letters
- 2: Down, 6 letters
- 3: Across, 8 letters
- 4: Down, 6 letters
- 5: Down, 4 letters
- 6: Down, 6 letters
- 7: Across, 7 letters
- 8: Across, 7 letters
- 9: Across, 7 letters
- 10: Across, 6 letters

WORD BANK

Cooking, Brushing, Cleaning, Singing, Reading, washing, Flying, watching, catching, watering

DOWN

- 1) ----- the TV (8)
- 2) ----- the plants (8)
- 3) ----- dinner (7)
- 4) ----- the dishes (7)
- 5) ----- the house (8)

ACROSS

- 3) ----- a ball (8)
- 7) ----- my teeth (8)
- 8) ----- a newspaper (7)
- 9) ----- a song (7)
- 10) ----- a kite (6)

3) Read the passage and answer carefully: →

The moon is Earth's natural satellite, orbiting around our planet. It is the fifth-largest moon in the solar system and is about one-fourth the size of Earth. The moon takes approximately 27 days to orbit around the Earth, and during this time, we see different phases of the moon, such as the full moon, crescent moon, and half moon.

Questions:-

1) What is the Moon?

Ans - _____

2) How big the moon compared to Earth?

Ans - _____

3) How long does it take for the moon to orbit around the Earth?

Ans - _____

4) What are some phases of the moon?

Ans - _____

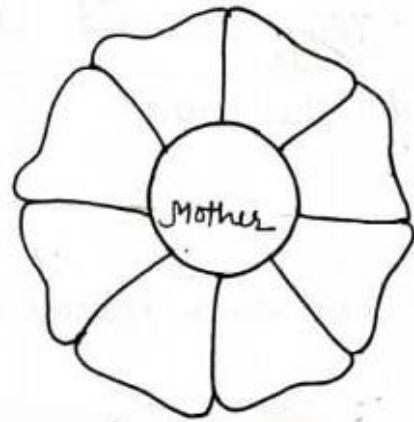

5) How many days does it take for the moon to complete one cycle of Phases?

Ans - _____

4) Convert in English:-

- 1) कृपया धीरे बोलिये।
- 2) राम थोड़ा लैट हो गया।
- 3) तुम बुद्धिमान हो।
- 4) मैं एक विद्यार्थी हूँ।
- 5) अमी आ रहा हूँ।
- 6) खाना लगा दो।
- 7) बहुत मजा आया।
- 8) नल खुला है।
- 9) भूल जाओ।
- 10) सच में।

5) Fill in the Petals with adjectives to describe the given nouns and then, colour the flowers:-



67

Look at the picture carefully and complete the sentences using the words from the help box: →



- 1) This is a scene of a
- 2) The children are
- 3) A girl is making a
- 4) One boy is a book.
- 5) Two boys are playing with a
- 6) A girl is on the
- 7) There are trees.
- 8) Everybody is looking very

Learning Home work

- Day:-1 Learn lesson- 10 W/M + Book Exercise
- Day:-2 Learn lesson- 10 Very short Ques- Ans
- Day:-3 Learn lesson- 10 Short Ques- Ans
- Day:-4 Learn lesson- 11 W/M + Book Exercise
- Day:-5 Learn lesson- 11 Very short Ques- Ans
- Day:-6 Learn lesson- 11 Short Ques- Ans
- Day:-7 Learn and write an essay My favourite teacher.
- Day:-8 Learn and write an application for school Leaving Certificate.
- Day:-9 Revise Present indefinite tense and make five sentences.
- Day:-10 Write down your daily routine in English

विषय: हिंदी

प्रश्न 1 चित्र देखकर सही जोड़े बनाइए -

(क)		बोलना ()
(ख)		लिखना ()
(ग)		पढ़ना ()
(घ)		सुनना ()

प्रश्न 2 कोई एक नाम लिखिए -

1. जगह का नाम _____
2. जानवर का नाम _____
3. व्यक्ति का नाम _____
4. वस्तु का नाम _____

प्रश्न 3 खाली स्थान भरिए -

कुतर	खुल	चुहिया	पुढ़िया
------	-----	--------	---------

1. एक _____ थी ।
2. बुढ़िया _____ बना रही थी ।
3. चुहिया _____ रही थी ।

2) निम्नलिखित वर्ग पहेली में से नदियों के नाम खोजो

य	मु	ना	कृ	ष्णा	गो
का	वे	री	न	र्म	दा
व्या	सिं	झे	चि	ना	व
स	त	ल	ज	गं	री
ता	प्ती	म	श्रा	गा	वी

3) चित्र को देखकर अपने

विचार व्यक्त कीजिए ।

समुद्र किनारे, पक्षी, नारियल, पेड़, पानी का जहाज़, गुब्बारे, रेत का किला, छाता, मौसम, आनंद



4) गद्यांश में से प्रश्नों के उत्तर दें ।

राज के पास किट्टी नाम की एक पालतू बिल्ली है। वह सफेद और भूरे रंग की है। राज को अपने घर के पिछवाड़े में किट्टी के साथ खेलना पसंद है। वे दोनों साथ में तितलियों का पीछा करते हैं और घास में

लौटते हैं। जब राज उसे पकड़ता है तो किट्टी उसे घूरने लगती है। राज अपनी बिल्ली से बहुत प्यार करता है।

प्रश्न -1. राज की पालतू बिल्ली का नाम क्या है?

प्रश्न -2. किट्टी किस रंग की है?

प्रश्न -3. राज और किट्टी कहाँ खेलते हैं?

प्रश्न-4. जब राज उसे पकड़ता है तो किट्टी क्या करती है?

5) निम्नलिखित प्रश्नों के उत्तर दीजिए ।

प्रश्न1 पिता का पत्र पुत्री के नाम पाठ के लेखक का नाम लिखिए ?

प्रश्न2. परियों ने बादल से क्या-क्या बनाया?

प्रश्न3 समुद्र का पानी कैसा होता है?

प्रश्न4 परियों द्वारा बनाए गए महल को सूरज ने क्या नाम दिया?

प्रश्न5 इस कहानी में कितनी परियां थीं?

प्रश्न6 नेहरू जी ने पत्र किसको लिखा ?

प्रश्न7 नेहरू जी का जन्मदिन किस रूप में मनाया जाता है?

प्रश्न8 पत्र कितनी तरह के होते हैं ?

प्रश्न9 पुराना हाल कैसे जाना जा सकता है ?

प्रश्न10 परियों ने मिश्रण में क्या-क्या मिलाया कहानी का क्या नाम था

निम्नलिखित शब्दों के लिंग बदलो।

- क) शेर
- ख) हंस
- ग) मोर
- घ) चोर
- ङ) भाई
- च) घोडा
- छ) बकरा
- ज) । तोता
- झ) माता
- ञ) लड़का

6) अनेक शब्दों की जगह एक शब्द लिखिए




- 1) जो गाना गाता हो
- 2) जो सेवा करता हो
- 3) जो कभी न मरे
- 4) सुनने वाला
- 5) जिसका कोई अल न हो



1)	_____
2)	_____
3)	_____
4)	_____
5)	_____



7) चित्र देखकर अपने विचार व्यक्त कीजिए ।



Learning Home work

पाठ- 10 (पिता का पत्र पुत्री के नाम)

पाठ 11 (परियों का खेल)

व्याकरण

परिभाषाएं याद करो

- भाषा
- संज्ञा
- लिंग
- वचन
- सर्वनाम
- विशेषण

मुहावरे और 1 से 50 तक गिनती याद करो

Measurement

1. Fill in the blanks:

- (i) $1 \text{ km} = \underline{\quad} \text{ m}$ (ii) $1 \text{ m} = \underline{\quad} \text{ cm}$ (iii) $1 \text{ dm} = \underline{\quad} \text{ cm}$
(iv) $1 \text{ m} = \underline{\quad} \text{ dm}$ (v) $1 \text{ km} = \underline{\quad} \text{ cm}$

2. Choose the right answer:

- (i) Rachel measured a pencil in (cm / m)
(ii) Distance between city A and city B is measured in (m / km)
(iii) 5 m is equal to cm (500 / 50)
(iv) A tailor uses a to measure the cloth (ruler, metre tape)
(v) 309 cm is equal to cm (3 m 9 cm / 30 m 9 cm)

3. (i) Convert 18 m into centimeters.

(ii) Change 32 m 47 cm into centimeters.

(iii) Convert 7 km into meters.

(iv) Convert the following:

- (a) 372 cm into meters and centimeters
(b) 2832 cm into meters and centimeters

(v) Convert the following as desired:

- (a) 3275 m into kilometers and meters
(b) 5217 m into kilometers and meters
(c) 57 dm into m and cm

4. Put appropriate sign $>$, $<$ or $=$ in the boxes.

(i) $32 \text{ m } 76 \text{ cm} \dots\dots\dots 48 \text{ m } 90 \text{ cm}$

(ii) $12 \text{ m} + 22 \text{ m} \dots\dots\dots 28 \text{ m}$

(iii) $1 \text{ m} \dots\dots\dots 100 \text{ cm}$

(iv) $78 \text{ m } 30 \text{ cm} - 23 \text{ m } 20 \text{ cm} \dots\dots\dots 84 \text{ m } 10 \text{ cm} - 56 \text{ m } 10 \text{ cm}$

5. Add the following:

(i) $72 \text{ m } 50 \text{ cm} + 15 \text{ m } 75 \text{ cm}$

(ii) $102 \text{ m } 25 \text{ cm} + 375 \text{ m } 85 \text{ cm}$

(iii) $8 \text{ dm } 9 \text{ cm} + 9 \text{ dm } 8 \text{ cm}$

(iv) $75 \text{ km } 312 \text{ m} + 34 \text{ km } 215 \text{ m}$

Topic - Money

Lucy is shopping for toys. She has notes and coins with her in her purse. She has notes of Rs 100, Rs 10 and coins of Rs 5 and Rs 2. Help Lucy Find out how many of each of these notes or coins she must give to the shopkeeper to buy each of these toys.



Rs 130

$$\begin{array}{cccc} \text{Rs} & & \text{Rs} & & \text{Rs} & & \text{Rs} \\ \boxed{} & + & \boxed{} & + & \boxed{} & + & \boxed{} \end{array}$$



Rs 12

$$\begin{array}{cc} \text{Rs} & \text{Rs} \\ \boxed{} & + & \boxed{} \end{array}$$



Rs 17

$$\begin{array}{ccc} \text{Rs} & \text{Rs} & \text{Rs} \\ \boxed{} & + & \boxed{} & + & \boxed{} \end{array}$$

Make the Bill

Aaron bought all toys from the top shelf of the toy shop and Abel bought all the toys from the bottom shelf. Can you make a bill for them ?



Rs 7



Rs 18



Rs 12



Rs 40



Rs 35



Rs 20



Rs 25



Rs 14

Aaron's bill

Items	Amount
<input type="text"/>	<input type="text"/>
<input type="text"/>	<input type="text"/>
<input type="text"/>	<input type="text"/>
<input type="text"/>	<input type="text"/>
<input type="text"/>	<input type="text"/>
Total	<input type="text"/>

Abel's bill

Items	Amount
<input type="text"/>	<input type="text"/>
<input type="text"/>	<input type="text"/>
<input type="text"/>	<input type="text"/>
<input type="text"/>	<input type="text"/>
<input type="text"/>	<input type="text"/>
Total	<input type="text"/>


Whose bill is more?

Topic -Time

Circle the correct time shown on each clock.



- 10:00
- 4:00
- 3:00
- 12:00



- 2:35
- 3:30
- 7:10
- 1:35




- 9:15
- 2:45
- 3:00
- 9:00



- 1:15
- 3:00
- 3:05
- 12:15




- 10:30
- 1:30
- 11:30
- 12:00



- 11:40
- 8:55
- 10:40
- 11:00



- 5:00
- 4:00
- 3:00
- 6:00



- 3:00
- 4:00
- 3:30
- 3:15

WHAT TIME IS IT?

Look and match.



half past eleven



half past eight



four o'clock



a quarter past twelve



a quarter to two



a quarter past nine




a quarter to seven








one o'clock

Data Handling

count and write the number of different fruits
in the box



				
<input type="text"/>	<input type="text"/>	<input type="text"/>	<input type="text"/>	<input type="text"/>

Look at the chart given below and answer the given questions.

Items	how many children in the school have it
Pens	47
Pencil	62
Crayon	51
Eraser	48
Pencil box	24

How many children have crayons?

.....

How many children have pencils?

.....






Which item is the least that children have?


.....

If all children have pencils, how many children are there altogether?

.....

Jake recorded the number of pizzas sold over five days.
Read the chart and answer the questions.

Day	Number of pizzas sold
Monday	
Tuesday	
Wednesday	
Thursday	
Friday	

 = 5 pizzas

- How many pizzas did he sell on Thursday? _____
- Which day did he sell the least pizzas? _____
- Which day did he sell the most pizzas? _____
- Which day did he sell 25 pizzas? _____
- How many pizzas did he sell on Monday and Wednesday? _____
- Were more pizzas sold on Monday or Friday? _____
- How many less pizzas were sold on Friday than Thursday? _____
- How many pizzas did he sell in five days? _____









Fill in the missing numbers

6	+		=	10	9	-		=			+	2	=	4
+				-	-				+	-				+
2									4	1				
=				=	=				=	=				=
	-	5	=		5	+		=	11		+	6	=	
	-	6	=		1	+	5	=		13	-	3	=	
-				+	+				+	+				-
				9										2
=				=	=				=	=				=
4	+		=	10		+	5	=	9		-	7	=	

Practice work

- Tables 2 to 20
- Ch- 10 (Measurement)
- Ch- 11 (Money)

1) Show how matter changes by completing the puzzles below. State whether the process is freezing point (solidification) or melting point?

 Ice	to	 Water	=	<input type="text"/>
 Water	to	 Ice	=	<input type="text"/>
 Popsicle	to	 Chocolate Drink	=	<input type="text"/>
 Chocolate Drink	to	 Popsicle	=	<input type="text"/>

Circle the objects that will melt under a hot sun.

The sun sends us light and heat.



If you melt ice in the sun, what do you get?

Fill in the blanks.

1. When an object blocks the path of the light, _____ is formed.
2. All the objects that give out light are called _____.
3. A push or pull is know as _____.
4. _____ is the main source of light on Earth.
5. Light travels in the _____ line.
6. Form of energy that you can see is called _____.
7. Unpleasant sound is called _____.
8. Force can change _____ and _____ of an object.
9. _____ star is closest to the earth.
10. We can see non-luminous objects in the presence of _____.

Water Cycle Word Search

n	i	a	r	w	r	o	r	e	i	n	s	c
o	e	o	p	t	u	c	i	a	s	s	n	l
i	l	o	e	p	v	s	n	e	d	a	o	v
t	t	s	n	r	i	s	r	n	u	p	i	n
a	c	u	y	e	n	o	c	p	v	a	t	h
s	l	e	e	t	p	o	l	n	c	t	a	p
n	o	i	t	a	t	i	p	i	c	e	r	p
e	u	a	v	w	o	n	s	o	l	l	o	i
d	d	s	p	y	t	n	r	c	r	i	p	h
n	s	n	n	e	o	s	y	d	i	r	a	a
o	t	a	i	r	c	c	i	o	o	n	v	h
c	c	p	s	r	a	i	t	t	a	l	e	i
c	i	l	i	a	w	n	v	v	c	t	l	i

precipitation
sleet
water
clouds


evaporation
snow
sun
cycle

rain
condensation
vapor
hail

5)

The Water Cycle

Color and complete the cycle with these words:
Precipitation, Collection, Evaporation and Condensation















Rain, snow and sleet from rain clouds

Water running from land into the ocean

Sun heats the waters and dries it up

Water vapor in the atmosphere turns to water

6) Look at the picture and write Yes if they are luminous objects or No if they are non luminous.

 <input type="text"/>	 <input type="text"/>	 <input type="text"/>
 <input type="text"/>	 <input type="text"/>	 <input type="text"/>
 <input type="text"/>	 <input type="text"/>	 <input type="text"/>
 <input type="text"/>	 <input type="text"/>	 <input type="text"/>

7)

Choose the correct answer.

A. This is the main source of light on earth.

- a. Moon b. Sun c. Torch d. Candle



B. Noise can be controlled by.

- a. Speaking loudly b. Using horn as far as possible c. Playing speakers at high volume
d. Keeping the volume of speaker, television at low.

C. Force can do.

- a. Nothing b. Move an object c. Stop a moving object
d. Change the shape of an object.

2. Who am I

a. I am formed when an object block the path of light. My size changes from time to time during a day. I am _____

b. I am an unpleasant sound. Too much of me is not good for you. I am _____


c. I can slow down the movement of objects. I am _____

Learning Work

Learn word meaning, very short question answers, short question answers, long question answers and book exercise of chapter-9 (light and sound and 10 (Air And Water)

Subject –Social Studies

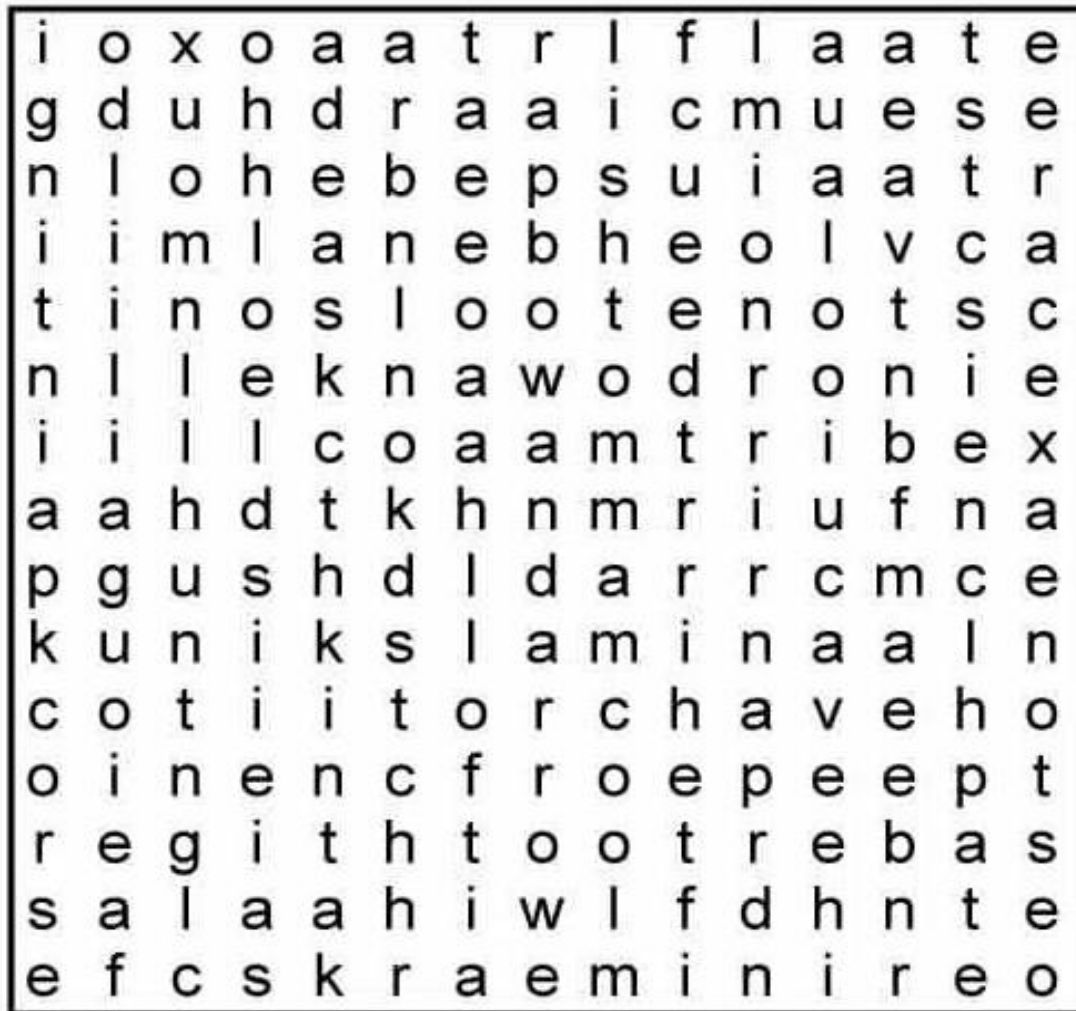
Look at the picture and answer the questions



- What do you see in the picture?
- What are early humans using?
- How early humans made these things?

Do the given worksheet

STONE AGE WORD SEARCH



FIND THESE WORDS -



mammoth
spear
torch
saber tooth tiger
animal skin
stone axe
rock painting
necklace
bones

flint
drum
cave
bow and arrow
hunt
fire
tribe
stone tools
idols



Do given worksheet

Stone age vocabulary

Fill in the missing letters.



spr__ng



w__rm



s__mm__r



h__t



w__nte__



col__



aut__m__



co__l



Climate or Weather?

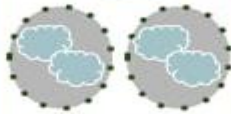


Weather pertains to short-term climatic conditions, whereas climate refers to the weather of a particular region approximated over time. Research the characteristics of weather, then list down the five differences between Climate and Weather.

WEATHER



CLIMATE



*Learning work
Chapter -12, 13,14 with book exercise*

Learn Chapter -7,8 Complete

***Learn and Write shortcut keys in Holiday Homework Notebook.
Do activity in Computer , Make a picture in Paint 3D software.***

SUBJECT –G.K(Learn these Questions)

1.What is the capital of India?

Answer: New Delhi

2. Which planet is known as the "Red Planet"?

Answer: Mars

3. What is the largest mammal in the world?

Answer: The blue whale

4. How many continents are there in the world?

Answer: Seven

5. What is the largest ocean on Earth?

Answer: The Pacific Ocean

6. Who wrote "Romeo and Juliet"?

Answer: William Shakespeare

7. What is the tallest mountain in the world?

Answer: Mount Everest

8. What is the largest animal on Earth?

Answer: The blue whale

9. What is the national flower of Japan?

Answer: Cherry Blossom

10. Which gas do plants absorb from the atmosphere?

Answer: Carbon dioxide

11. What is the smallest planet in our solar system?

Answer: Mercury

12. What is the closest star to Earth?

Answer: The Sun

13. Who painted the Mona Lisa?

Answer: Leonardo da Vinci

14. What is the largest bird in the world?

Answer: The ostrich

15. What is the Earth's natural satellite?

Answer: The Moon

16. Which animal is known as the "King of the Jungle"?

Answer: Lion

17. What is the process of a caterpillar changing into a butterfly called?

Answer: Metamorphosis

18. What is the chemical symbol for water?

Answer: H₂O

19. Who invented the light bulb?

Answer: Thomas Edison

20. What is the largest reptile in the world? Answer: The saltwater crocodile

Enjoy the Holidays