

# APS

Aff. No. - 531572  
Aff. to C.B.S.E. New Delhi  
Delhi Road, Near Flyover, Ch. Dadri  
Mob.8708451933, 9991038930 | apsdadri@gmail.com  
**SR. SEC. SCHOOL**

# MY WINTER VACATION WORK

Winter Vacation Start From 1/01/2024 To 15/01/2024

**Class- 2nd**

## **Subject- English**

### **Good Habbit**

- **Go to bed and get up on time.**
- **Brush your teeth daily.**
- **Wish your parents.**
- **Read newspaper daily.**
- **Wash your hands before and after eating food.**
- **Try to speak in English at home.**
- **Help your parents in their work.**

Name: ..... Class: ..... Date: .....

# All about me



Hi!

My name is \_\_\_\_\_. I come from \_\_\_\_\_. I live in \_\_\_\_\_. I am \_\_\_\_\_ years old. I have a \_\_\_\_\_. Her name is \_\_\_\_\_, and she is \_\_\_\_\_ years old.

My favourite food is \_\_\_\_\_. I also like to eat \_\_\_\_\_ and \_\_\_\_\_, but I don't like \_\_\_\_\_ and I never eat \_\_\_\_\_.



My favourite drink is \_\_\_\_\_. I also like to drink \_\_\_\_\_ and \_\_\_\_\_. I don't like \_\_\_\_\_.



My favourite TV show is \_\_\_\_\_.

My idol is \_\_\_\_\_.

My favourite colour is \_\_\_\_\_. I also like \_\_\_\_\_ colour. I never wear \_\_\_\_\_.

My favourite toy is \_\_\_\_\_. I also like to play with \_\_\_\_\_ and \_\_\_\_\_, but I don't like \_\_\_\_\_.

My favourite season is \_\_\_\_\_. During \_\_\_\_\_ I go \_\_\_\_\_ and I can play \_\_\_\_\_.

I also like \_\_\_\_\_, but I don't like \_\_\_\_\_.



my  
photo  
here

# Conjunctions

## And, but, so, because


Choose the correct answer:

1. I am very fat \_\_\_\_\_ I am happy.
2. Jim is not polite \_\_\_\_\_ no one likes him.
3. Dan didn't study for the quiz \_\_\_\_\_ he didn't get the full mark.
4. I'm going to England \_\_\_\_\_ I will see Big Ben a lot of nice places.
5. My mother likes tea \_\_\_\_\_ my father likes coffee.
6. I' hungry \_\_\_\_\_ I didn't have my breakfast.
7. I lost my keys \_\_\_\_\_ I can't get into my house.
8. Susan can't cook \_\_\_\_\_ her mother didn't teach her.
9. You didn't understand this \_\_\_\_\_ you didn't listen to the teacher.
10. Paul gets up \_\_\_\_\_ takes a shower.
11. My mum works in a big office \_\_\_\_\_ she doesn't like it.
12. There are good stories in the library \_\_\_\_\_ you can read there.
13. The kitchen is dirty \_\_\_\_\_ you didn't clean it.
14. The baby is crying \_\_\_\_\_ you didn't feed him.


# Prepositions


Fill in the blanks with an appropriate preposition

The ball is  \_\_\_\_\_ the box.

 The ball is \_\_\_\_\_ the box.

The ball is \_\_\_\_\_ the box. 

 The ball is \_\_\_\_\_ the boxes.

The ball is \_\_\_\_\_ the box. 

Read the passage and give answer

## James's Family

Hello there. My name is James, and I work in a school. I live in a small apartment in Texas with my wife Sophia and our two daughters, Florence (who is eight) and Prudence (who is six). I get up every morning at six o'clock and do my daily exercises before breakfast. I like to keep fit because my job at the school is very difficult and requires a lot of energy.



1. Where does James work?  
a. school      b. mall      c. park
2. How many children does James have?  
a. One      b. Two      c. Three
3. What is James's wife name?  
a. Tina      b. Flora      c. Sophia
4. When does James get up every morning?  
a. six o'clock      b. five o'clock      c. ten o'clock



Fill in the blanks with the correct feminine pair you can find in the box:

woman	princess	countess	daughter	mother
sister	girl	spinster	wife	queen
mistress	heiress	hostess	madam	nun
witch	lady	aunt	bride	niece

1. boy \_\_\_\_\_
2. uncle \_\_\_\_\_
3. son \_\_\_\_\_
4. father \_\_\_\_\_
5. man \_\_\_\_\_
6. master \_\_\_\_\_
7. gentleman \_\_\_\_\_
8. earl \_\_\_\_\_
9. husband \_\_\_\_\_
10. king \_\_\_\_\_
11. brother \_\_\_\_\_
12. bachelor \_\_\_\_\_
13. monk \_\_\_\_\_
14. sir \_\_\_\_\_
15. nephew \_\_\_\_\_
16. wizard \_\_\_\_\_
17. host \_\_\_\_\_
18. heir \_\_\_\_\_
19. prince \_\_\_\_\_
20. bridegroom \_\_\_\_\_



**Change the Singular noun into plural.**

1. table \_\_\_\_\_

2. friend \_\_\_\_\_

3. spoon \_\_\_\_\_

4. hat \_\_\_\_\_

5. phone \_\_\_\_\_

6. lamp \_\_\_\_\_

7. cow \_\_\_\_\_

8. teacher \_\_\_\_\_

9. car \_\_\_\_\_

10. park \_\_\_\_\_

11. plant \_\_\_\_\_

12. toy \_\_\_\_\_

13. book \_\_\_\_\_

14. zebra \_\_\_\_\_







15. rock \_\_\_\_\_


16. store \_\_\_\_\_



## Subject -Maths

The pictogram below shows the number of cars Mr. James repaired last week.

Day	Number of cars repaired
Monday	
Tuesday	
Wednesday	
Thursday	
Friday	
Saturday	
Sunday	

Key:  represents 6 cars

Answer the following questions.

- 1) How many cars did Mr. James repair on Monday? \_\_\_\_\_
- 2) On which day the maximum number of cars were repaired?  
\_\_\_\_\_
- 3) Did he repair 30 cars on Wednesday? \_\_\_\_\_
- 4) On which day Mr. James didn't do any work? \_\_\_\_\_
- 5) How many cars did he repair on Friday and Saturday? \_\_\_\_\_
- 6) How much more cars did he repair on Thursday than Wednesday?  
\_\_\_\_\_

**DIVISION PRACTICE**

$32 \div 8 =$

$27 \div 3 =$

$48 \div 6 =$

$10 \div 2 =$

$16 \div 2 =$

$40 \div 5 =$

$21 \div 3 =$

$36 \div 4 =$

$35 \div 5 =$

$14 \div 7 =$

$21 \div 7 =$

$30 \div 6 =$

$18 \div 6 =$

$45 \div 9 =$

1.  $24 \div 6 =$  \_\_\_\_\_

2.  $18 \div 3 =$  \_\_\_\_\_

3.  $32 \div 4 =$  \_\_\_\_\_

4.  $36 \div 6 =$  \_\_\_\_\_

5.  $24 \div 3 =$  \_\_\_\_\_

6.  $20 \div 4 =$  \_\_\_\_\_

7. 
$$\begin{array}{r} \phantom{00} \\ 3 \overline{) 27} \end{array}$$

8. 
$$\begin{array}{r} \phantom{00} \\ 4 \overline{) 36} \end{array}$$

9. 
$$\begin{array}{r} \phantom{00} \\ 5 \overline{) 45} \end{array}$$

10. 
$$\begin{array}{r} \phantom{00} \\ 6 \overline{) 48} \end{array}$$

11. 
$$\begin{array}{r} \phantom{00} \\ 7 \overline{) 49} \end{array}$$

12. 
$$\begin{array}{r} \phantom{00} \\ 8 \overline{) 16} \end{array}$$



Subtraction:-

$$\begin{array}{r} 9080 \\ - 4789 \\ \hline \end{array}$$

$$\begin{array}{r} 9070 \\ - 4469 \\ \hline \end{array}$$

$$\begin{array}{r} 9060 \\ - 3569 \\ \hline \end{array}$$

$$\begin{array}{r} 9080 \\ - 2978 \\ \hline \end{array}$$

$$\begin{array}{r} 9050 \\ - 1388 \\ \hline \end{array}$$

$$\begin{array}{r} 9040 \\ - 4779 \\ \hline \end{array}$$

$$\begin{array}{r} 9060 \\ - 5898 \\ \hline \end{array}$$

$$\begin{array}{r} 9080 \\ - 4556 \\ \hline \end{array}$$

$$\begin{array}{r} 9040 \\ - 3588 \\ \hline \end{array}$$

$$\begin{array}{r} 9060 \\ - 2978 \\ \hline \end{array}$$

$$\begin{array}{r} 9070 \\ - 1776 \\ \hline \end{array}$$

$$\begin{array}{r} 9060 \\ - 2964 \\ \hline \end{array}$$

$$\begin{array}{r} 9090 \\ - 3743 \\ \hline \end{array}$$

$$\begin{array}{r} 9060 \\ - 4279 \\ \hline \end{array}$$

$$\begin{array}{r} 9090 \\ - 5968 \\ \hline \end{array}$$

## Topic- MONEY

### I) Write the amount in words :

1. ₹ 65.50 = \_\_\_\_\_
2. ₹ 65.50 = \_\_\_\_\_
3. ₹ 78.25 = \_\_\_\_\_
4. ₹ 263 = \_\_\_\_\_
5. ₹ 50.65 = \_\_\_\_\_
6. ₹ 550 = \_\_\_\_\_
7. ₹ 335 = \_\_\_\_\_
8. ₹ 45.30 = \_\_\_\_\_
9. ₹ 25.50 = \_\_\_\_\_

### II) Write the amount in figures :

1. Eighty five rupees and fifty paise : \_\_\_\_\_
2. Five hundred and forty five rupees : \_\_\_\_\_
3. Ninety rupees and twenty paise : \_\_\_\_\_
4. One hundred and fifteen rupees : \_\_\_\_\_
5. Two hundred rupees : \_\_\_\_\_
6. Twenty five rupees and ten paise : \_\_\_\_\_



# Add

a.      p  
      20  
+   85  
\_\_\_\_\_

b.      p  
      49  
+   50  
\_\_\_\_\_

c.      p  
      74  
+   15  
\_\_\_\_\_

d.   Rs      p  
   78.91  
+ 21.17  
\_\_\_\_\_

e.   Rs      p  
   49.30  
+ 30.50  
\_\_\_\_\_

f.   Rs      p  
   67.24  
+ 10.33  
\_\_\_\_\_



## Make the Bill

Aaron bought all toys from the top shelf of the toy shop and Abel bought all the toys from the bottom shelf. Can you make a bill for them ?

			
Rs 7	Rs 18	Rs 12	Rs 40
			
Rs 35	Rs 20	Rs 25	Rs 14

### Aaron's bill

Items	Amount
<input type="text"/>	<input type="text"/>
<input type="text"/>	<input type="text"/>
<input type="text"/>	<input type="text"/>
<input type="text"/>	<input type="text"/>
<input type="text"/>	<input type="text"/>
<b>Total</b>	<input type="text"/>

### Abel's bill

Items	Amount
<input type="text"/>	<input type="text"/>
<input type="text"/>	<input type="text"/>
<input type="text"/>	<input type="text"/>
<input type="text"/>	<input type="text"/>
<input type="text"/>	<input type="text"/>
<b>Total</b>	<input type="text"/>

Whose bill is more?

## SUMS OF MULTIPLY

$$\begin{array}{r} 222 \\ \times 2 \\ \hline \end{array}$$

$$\begin{array}{r} 333 \\ \times 2 \\ \hline \end{array}$$

$$\begin{array}{r} 321 \\ \times 2 \\ \hline \end{array}$$

$$\begin{array}{r} 123 \\ \times 2 \\ \hline \end{array}$$

$$\begin{array}{r} 231 \\ \times 2 \\ \hline \end{array}$$

$$\begin{array}{r} 111 \\ \times 2 \\ \hline \end{array}$$

$$\begin{array}{r} 223 \\ \times 2 \\ \hline \end{array}$$

$$\begin{array}{r} 322 \\ \times 2 \\ \hline \end{array}$$


$$\begin{array}{r} 122 \\ \times 2 \\ \hline \end{array}$$

$$\begin{array}{r} 221 \\ \times 2 \\ \hline \end{array}$$

$$\begin{array}{r} 311 \\ \times 2 \\ \hline \end{array}$$

$$\begin{array}{r} 113 \\ \times 2 \\ \hline \end{array}$$


## Solve the Following Sums


$$\begin{array}{r} 11 \\ \times 2 \\ \hline \end{array}$$

—

$$\begin{array}{r} 33 \\ \times 4 \\ \hline \end{array}$$

—


$$\begin{array}{r} 39 \\ \times 0 \\ \hline \end{array}$$

—

$$\begin{array}{r} 91 \\ \times 5 \\ \hline \end{array}$$

—

$$\begin{array}{r} 43 \\ \times 7 \\ \hline \end{array}$$

—

$$\begin{array}{r} 17 \\ \times 6 \\ \hline \end{array}$$

—

$$\begin{array}{r} 66 \\ \times 2 \\ \hline \end{array}$$

—

$$\begin{array}{r} 14 \\ \times 3 \\ \hline \end{array}$$

—

$$\begin{array}{r} 86 \\ \times 5 \\ \hline \end{array}$$

—

$$\begin{array}{r} 94 \\ \times 1 \\ \hline \end{array}$$

—

$$\begin{array}{r} 18 \\ \times 9 \\ \hline \end{array}$$

—

$$\begin{array}{r} 27 \\ \times 7 \\ \hline \end{array}$$

—

$$\begin{array}{r} 28 \\ \times 3 \\ \hline \end{array}$$

—

$$\begin{array}{r} 65 \\ \times 8 \\ \hline \end{array}$$

—

$$\begin{array}{r} 53 \\ \times 6 \\ \hline \end{array}$$

—



## Subject-EVS (Topic – Water and Animals )

1. Fill in the blanks with the correct words.

- Dirty water contains \_\_\_\_\_ (germs / tap).
- The water from rain is called \_\_\_\_\_ (drums, rainwater)
- \_\_\_\_\_ (close / open) the tap while brushing your teeth.

2. Choose the correct option.

- Drinking dirty water can make us:  
1. tall    2. ill    3. healthy    4. reading
- Which of these do you use to store water?  
1. plastic    2. drum    3. bucket    4. both 2 and 3
- How can one kill the germs in drinking water?  
1. by boiling it    2. by wasting it    3. by storing it    4. by freezing it

1. Fill in the blanks with the correct words.

- \_\_\_\_\_ (Birds / Fish) are animals with wings.
- Insects are animals with \_\_\_\_\_ (two / six) legs.
- \_\_\_\_\_ (Monkey / Crocodiles) can live on land as well as in water.

2. Circle the odd one out.

- Big animals : tiger, rabbit, lion, elephant
- Birds that swim : duck, swan, goose, eagle
- Birds : penguin, parrot, pig, pigeon

3. Give reasons



Q. Which of these animals cannot fly? Give one reason for your choice.

---

---



## Uses of domestic animals

Fill in the blanks with correct words given in the box:

milk	wool	eggs	ride
loads	catches	honey	guards

1. We can \_\_\_\_\_ on a horse.



2. A hen gives us \_\_\_\_\_ and chicken.



3. A donkey can carry \_\_\_\_\_ on its back.



4. A honey bee gives us \_\_\_\_\_.



5. A dog \_\_\_\_\_ our house.



6. A sheep gives us \_\_\_\_\_.



7. We get \_\_\_\_\_ and meat from a goat.



8. A cat \_\_\_\_\_ mice.



**Q. Fill in the blanks using the given words.**

eight	six	water	wings	beak
ostrich	whale	wild	lion	penguin

- a) Animals who live in forest are called \_\_\_\_\_ animals.
- b) Birds use \_\_\_\_\_ to fly.
- c) Birds use \_\_\_\_\_ to eat food.
- d) \_\_\_\_\_ is called king of the jungle.
- e) \_\_\_\_\_ is the biggest bird
- f) Most insects have \_\_\_\_\_ legs.
- g) Spider have \_\_\_\_\_ legs.
- h) Turtle is a \_\_\_\_\_ animal.
- i) \_\_\_\_\_ cannot fly but can swim in water.
- j) \_\_\_\_\_ is the biggest animal on earth.

**Q. Match the animals with their houses.**

honeybee	•	•	den
dog	•	•	web
spider	•	•	stable
horse	•	•	kennel
lion	•	•	hive

Fill in the blanks.

salty

fresh

solid

lakes

oceans

liquid

cannot

Most of Earth's water is found in the \_\_\_\_\_.

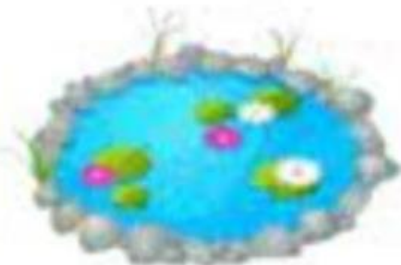
They are huge bodies of \_\_\_\_\_ water.

We \_\_\_\_\_ use them for drinking.

Very little of the water on earth is \_\_\_\_\_ water.

Rivers and lakes are \_\_\_\_\_ fresh water.

Icebergs and glaciers are \_\_\_\_\_ fresh water.



Wild animals

**Exercise 1: Choose a word from the box and write under each picture:**

fox	zebra	cheetah	bear
wolf	panda	kangaroo	eagle



1 \_\_\_\_\_



2 \_\_\_\_\_



3 \_\_\_\_\_



4 \_\_\_\_\_



5 \_\_\_\_\_



6 \_\_\_\_\_



7 \_\_\_\_\_



8 \_\_\_\_\_

**Exercise 2: What animal is it? Read and write the words from Ex1.**

1. It looks like a leopard. It has black spots and it can run fast.	
2. It is a big dog. It lives and hunts in groups.	
3. It is a strong bird and it can see very well.	
4. It is black and white. It likes bamboo.	
5. It is big and heavy. It likes honey and fish.	
6. It lives in Australia. It has a strong tail . It can jump fast.	
7. It has red-brown fur and a thick heavy tail.	
8. It looks like a horse. It has got black and white lines.	

I. What are the kinds of plants do you know? Please click your answer to name the given plant.



Grapes

shrub

vine



Narra

tree

herb



Basil

herb

vine



Coconut

tree

vine



Rosemary

tree

herb



Watermelon

bulb

vine



Tomato

shrub

bulb



Tulips

tree

bulb



Roses

shrub

vine



Onion

bulb

herb



## विषय: हिंदी

प्र०.1. कुछ खेलों के नाम बताओ जिनमें दो लीनियाँ खेलती हों।

उत्तर ⇒ \* ..... \* .....  
\* ..... \* .....

प्र०.2. घर की सफाई करने के लिए किन-किन चीजों का इस्तेमाल होता है? लिखें।

उत्तर ⇒ \* ..... \* .....  
\* ..... \* .....

प्र०.3. सफाई के काम से जुड़े शब्द सूची और लिखें।

उत्तर ⇒ \* झाड़ना \* ..... \* .....  
\* ..... \* .....

प्र०.4. बूढ़ी अम्मा का काम बतायें और आपके घर में ये काम कौन करता है बतायें।

बूढ़ी अम्मा का काम	मेरे घर में कौन करता है।
* .....	* .....
* .....	* .....
* .....	* .....
* .....	* .....

3) गद्यांश में से प्रश्नों के उत्तर दें

एक बार एक छोटा सा आम का पेड़ अपनी कहानी सुना रहा था। वह कह रहा था, "मैं पहले छोटा सा बीज था। फिर मैं पानी, मिट्टी और सूरज की मदद से बड़ा हो गया। अब मैं बहुत ऊँचा और खुश हूँ।"

प्रश्न - 1 आम का पेड़ क्या सुना रहा था?

---

---

प्रश्न - 2 आम का पेड़ पहले क्या था?

---

---

## व्याकरण - गिनती

चौदह, बाईस, पच्चीस, इक्कीस, सताईस,  
सताइस, पन्द्रह, उनतीस, उन्नतीस  
अठारह, उन्नीस, बारह, अठाईस, सत्रह,  
नौ, छह, छः, ग्यारह, गयारह

प्रश्न- नीचे दिए गए खाली स्थानों पर सही गिनती चुनकर लगाएँ ।

14

27

22

11

25

19

21

18

29

12

9

28

6

17

2) निम्नलिखित वर्ग पहेली में से सब्जियों के नाम खोजो

मू	लौ	की	तो	क	रैं	दा	चौ
ली	चु	कं	द	र	सिं	ला	ल
से	भिं	गा	प्या	अ	ई	घा	सौ
क	म	डी	ज	द	भ	सी	ड़ा
रे	ट	मा	ट	र	मे	बैं	बं
ला	र	ह	पा	क	थी	ग	द
ब	थु	आ	ल	ह	सु	न	गो
क	हू	लू	क	फू	ल	गो	भी

---

---

---

---

---

---

---

6) निम्नलिखित प्रश्नों के उत्तर लिखिए।

प्रश्न 1 पानी के स्रोतों के नाम बताओ?

---

---

प्रश्न 2 बारिश के बाद पानी कहां-कहां जाता है?

---

---

प्रश्न 3 क्या आपको बारिश अच्छी लगती है और क्यों ?

---

---

प्रश्न 4 बारिश के फायदे व नुकसान लिखिए ।

---


---

---

प्रश्न 5 आप घरों में पानी का उपयोग कैसे कैसे करते हैं ?

---

7) चित्र देखकर अपने विचार व्यक्त कीजिए ।



---


---

---

---

---





---

---

---

---

---

---

---

---

---

---

## सर्वनाम

परिभाषा:-

---

---

---

**खाली स्थान में उचित सर्वनाम शब्द लिखिए।**

- वहां ..... बैठा है। (कौन / किसका )
- .....खाना बनाना आता है। (मुझे / मेरा )
- ये..... घर है। (मुझे / मेरा )
- .....नाम क्या है। (तुम्हें / आपका )
- मुझे खाने के लिए .....चाहिए (तुम / कुछ )
- .....कौन आ रहा है। (किसका / वह )
- सीता .....पुत्री थी? (उन्हें / किसकी )

**Subject - Computer**

• **Tick the correct option.**

1. Which of the following display the name of the program?

- a. Title Bar                      b. Menu Bar                      c. Canvas

2. Which of these motion block is used to move the character up?

- a. ↑                      b. ↓                      c. →

3. Which tool is used to draw freehand drawing in Paint 3D?

- a. Brushes tool                      b. 3D shape tool                      c. Paint

4. How many dimensions does a rectangle have?

- a. One                      b. Two                      c. Three

• **Ture(T) / False(F) :-**

1. You can rotate only the text and not the shapes.

\_\_\_\_\_

2. Show block hides the character until it is visible .

\_\_\_\_\_

3. Green flag button is used to start the script.

\_\_\_\_\_

4. Rotate tool create a copy of the shape.

\_\_\_\_\_

• **Answer the following questions.**

1. Name any one event block.

Ans. \_\_\_\_\_


2. What are Grab points?

Ans. \_\_\_\_\_

3 Which block is used to play a pop sound?

Ans \_\_\_\_\_

• Label the picture.



# Learning Home work

**English:** Ch 10 Who made Tiddalik Laugh

Ch 11 The Swan

**EVS:** Ch 13 Plants Around Us

Ch 14 Animals Around Us

Ch 15 Air and Water

**Maths:** Tables 11 to 18

**G.K.:** Ch 24 to 33

**हिंदी** पाठ 11 नोना और बारिश

पाठ 12 नाव

पाठ 13 गिरे ताल में चंदा मामा

**Enjoy the holidays**