

APS

Aff. No. - 531572
Aff. to C.B.S.E. New Delhi
Delhi Road, Near Flyover, Ch. Dadri
Mob.8708451933, 9991038930 | apsdadri@gmail.com
SR. SEC. SCHOOL

MY WINTER VACATION WORK

Winter Vacation Start From 1/01/2024 To 15/01/2024

Class - 1st

Subject - English

Q.1 Read the comprehension and tick the correct answer:-

Ladybug

I am Chloe and I am a ladybug. I am red and black in color. I have six short legs. I have an oval body. I love sitting on a leaf.



1) What is the name of the ladybug?

- a) Haley b) Chloe c) Tom

2) What is the color of Ladybug?

- a) red and black b) red and orange c) red and yellow

3) How many short legs does the ladybug have?

- a) ten b) nine c) six

4) The ladybug loves to _____ on a leaf.

- a) dance b) sit c) sleep

Q2. Fill in the blanks with the suitable words :-

1. My school name is _____
2. It is the best school _____
3. It is an english medium _____
4. It is _____
5. It has _____
6. It has _____
7. It looks _____
8. It has _____
9. There are _____
10. I am _____



Q.3 Use of has, have



I

a red kite.



She

a pink bike.



He

a green hat.



She

five dolls.



I

a white dog.



He

one ball.



He

a brown robot.



I

a yellow plane.



She

an orange cat.



I

a green bird.

Q4. Rewrite the given sentences by beginning them with the capital letter and ending them with full stop?

1 my cat tom likes winters








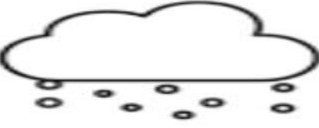



2 she and i love to skate

3 do you want hot cocoa

4 where is your sweater

5 granny bakes cookies for phil every year

Q5. Complete the Sudoku

Hints:-



Q6. Look at the picture and solve it.



happy reading park playing jumping pulling

1. This is a scene of a _____.

2. The children are _____.

3. The girl is _____ a book.

4. One boy is _____ happily.

5. Another boy is _____ the cart.

Q 7. Rewrite the sentences below in the cursive writing:-

Mountains are one of the most prominent feature of the Earth's landscape. They symbolize perfection, success, strength and many other positive traits. The highest tip of the mountain is called Peak.

Our solar system consists of eight planets that revolve around the Sun, which is central to our solar system. These planets have broadly been classified into two types that are inner planets and outer planets.

Subject :- Hindi

प्रश्न 1. नीचे दिए गए गद्यांश को पढ़िए :

एक दिन नानी बाज़ार गयी ।

रेखा भी नानी के साथ गई ।

बाज़ार से नानी ने चार केले,

दो सेब और जलेबी खरीदे ।

एक केला रमेश को दिया

और एक केला सुरेश को दिया ।

केले मीठे-मीठे थे ।

सुरेश ने एक सेब खाया ।

रेखा ने जलेबी खायी ।

सही उत्तर चुनिए:-

(i) _____ नानी के साथ बाज़ार गई ।

(ii) बाज़ार से नानी ने दो _____ खरीदे ।

(iii) रमेश और सुरेश ने _____ खाए ।

(iv) सेब _____ ने खाया ।

(v) केले _____ थे ।

(vi) रेखा ने _____ खायी ।

संकेत- केले, सुरेश, रेखा, जलेबी, सेब, मीठे-मीठा

प्रश्न 2. नीचे दिए शब्दों के समान अर्थ वाले शब्द लिखो:


	पानी	-	
	हवा	-	
	सूरज	-	
	पहाड़	-	
	घर	-	
	राजा	-	
	रात	-	
	आसमान	-	
	औरत	-	
	सुबह	-	
	शाम	-	



चित्र देखकर वाक्य पूरे करो।




इस पक्षी को ...गौरैया... कहते हैं।



..... काँव-काँव बोल रहा है।



..... नाच रहा है।



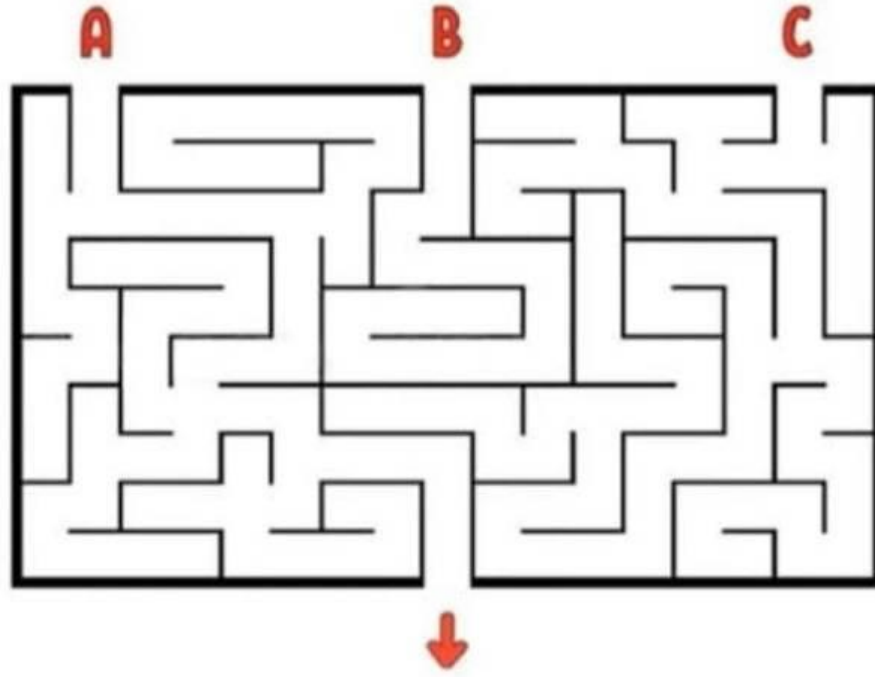
..... गा रही है।



तोता और बैठे हैं।

प्रश्न 4.आईए मिलकर कुछ मजा करें।

वैज्ञानिक को अपने लैब तक वैक्सीन बनाने के लिए पहुंचना है, लेकिन वह भूल भुलैया के इस चक्कर में फस गया है क्या आप उसकी मदद कर सकते हैं तो बताएं इनमें से कौन सा रास्ता सही है



***कहानी को पढ़ें व नैतिक शिक्षा का अपने जीवन में पालन करें। लोमड़ी और बकरी की कहानी**

एक बार एक लोमड़ी रात को जंगल में घूम रही थी की अचानक वो एक कुँए में जा गिरी। अब उसे समझ नहीं आ रहा था की वो करे तो क्या करे। इस लिए उसने सुबह तक का इंतज़ार करने का सोचा।

सुबह होते ही एक बकरी कुँए के पास से गुज़री और उसने लोमड़ी को देखा और कहा तुम कुँए में क्या कर रही हो ?

तो बकरी ने कहा की," में यहाँ पानी पीने आयी हूँ और ये पानी आजतक का सबसे स्वादिष्ट पानी है,आओ तुम भी पी के देखो?" बकरी ने बिना सोचे ही कुँए में छलांग लगा दी।

थोड़ी देर पानी पीने के बाद बकरी ने बाहर जाने का सोचा तो देखा की वो वहां फंस चुकी है। अब लोमड़ी ने कहा की में तुम्हारे ऊपर चढ़ कर बाहर निकल जाता हूँ और किसी को मदद के लिए ले आऊंगा।

बेचारी भोली बकरी ने लोमड़ी की चाल नहीं समझी और बिना सोचे समझे हाँ कर दी।

अब लोमड़ी बाहर निकलते ही बकरी को बोलने लगी की,"अगर तुम इतनी भी समझदार होती तो कभी बिना समझे कुँए में नहीं आती और ऐसे नहीं फस्ती और लोमड़ी ये बोलके वहां से चली गयी।"

नैतिक शिक्षा: कोई भी निर्णय लेने से पहले सोचें। बिना सोचे समझे कोई फैसला ना

Subject -Maths

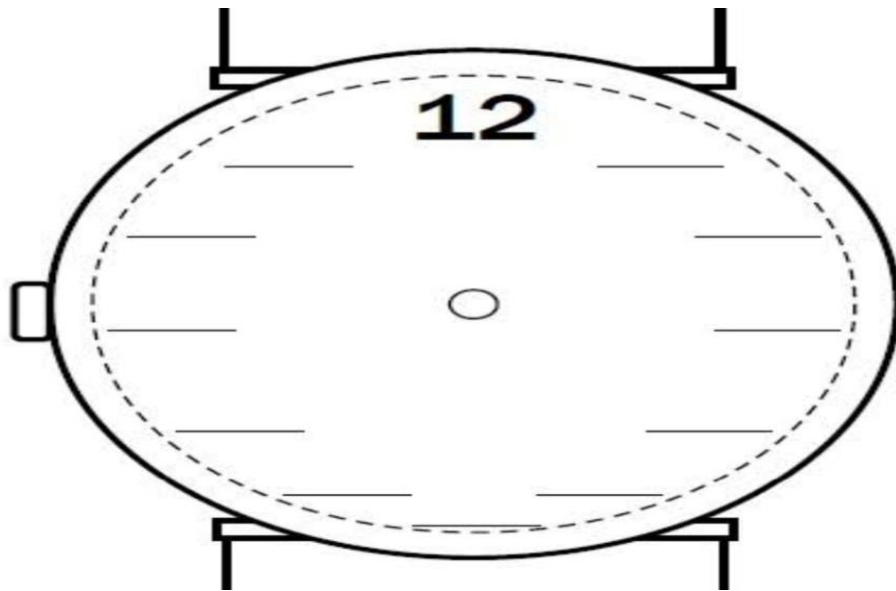
Q1. Add the following money:-

$\text{Rs. } 20 + \text{Rs } 2 =$	<input type="text" value="Rs"/>	$\text{Rs } 8 + \text{Rs } 2 =$	<input type="text" value="Rs"/>
$\text{Rs } 100 + \text{Rs } 1 =$	<input type="text" value="Rs"/>	$\text{Rs } 9 + \text{Rs } 1 =$	<input type="text" value="Rs"/>
$\text{Rs } 75 + \text{Rs } 15 =$	<input type="text" value="Rs"/>	$\text{Rs } 19 + \text{Rs } 13 =$	<input type="text" value="Rs"/>
$\text{Rs } 20 + \text{Rs } 7 =$	<input type="text" value="Rs"/>	$\text{Rs } 39 + \text{Rs } 5 =$	<input type="text" value="Rs"/>
$\text{Rs } 80 + \text{Rs } 1 =$	<input type="text" value="Rs"/>	$\text{Rs } 17 + \text{Rs } 10 =$	<input type="text" value="Rs"/>
$\text{Rs } 51 + \text{Rs } 1 =$	<input type="text" value="Rs"/>	$\text{Rs } 15 + \text{Rs } 12 =$	<input type="text" value="Rs"/>
$\text{Rs } 17 + \text{Rs } 7 =$	<input type="text" value="Rs"/>	$\text{Rs } 17 + \text{Rs } 10 =$	<input type="text" value="Rs"/>
$\text{Rs } 2 + \text{Rs } 1 =$	<input type="text" value="Rs"/>	$\text{Rs } 20 + \text{Rs } 8 =$	<input type="text" value="Rs"/>
$\text{Rs } 30 + \text{Rs } 5 =$	<input type="text" value="Rs"/>	$\text{Rs } 19 + \text{Rs } 7 =$	<input type="text" value="Rs"/>
$\text{Rs } 18 + \text{Rs } 8 =$	<input type="text" value="Rs"/>	$\text{Rs } 22 + \text{Rs } 2 =$	<input type="text" value="Rs"/>


Q2. Draw hands of each clock to show the time where the train is stop!

The image shows a winding train track with a blue and yellow train at the top right. Six clock faces are placed at various points along the track, each with a speech bubble indicating the time. The times are: 06.00, 07.15, 08.30, 09.10, 10.45, and 12.30. The track is represented by a series of orange and white striped segments.









Q 3. Write the number on a clock. Draw the minute hand to twelve and hour hand to five .



Q 4. Look at all the fruits given below:-



Count and write the number of fruits below:

 =	 =	 =	 =
 =	 =	 =	 =

Q 5. Solve the sums of divide :-

$$2 \overline{)12}$$

$$3 \overline{)9}$$

$$5 \overline{)10}$$

$$6 \overline{)6}$$

$$5 \overline{)15}$$

$$4 \overline{)12}$$

$$3 \overline{)6}$$

$$4 \overline{)16}$$

$$2 \overline{)8}$$

$$7 \overline{)14}$$

$$3 \overline{)12}$$

$$2 \overline{)10}$$

$$9 \overline{)18}$$

$$1 \overline{)13}$$

$$4 \overline{)8}$$

$$5 \overline{)20}$$

$$2 \overline{)14}$$

$$5 \overline{)25}$$

$$3 \overline{)15}$$

$$8 \overline{)16}$$

Q6. Add the following:-

$$\begin{array}{r} 24 \\ + 17 \\ \hline \end{array}$$

$$\begin{array}{r} 65 \\ + 35 \\ \hline \end{array}$$

$$\begin{array}{r} 53 \\ + 27 \\ \hline \end{array}$$

$$\begin{array}{r} 89 \\ + 11 \\ \hline \end{array}$$

$$\begin{array}{r} 38 \\ + 54 \\ \hline \end{array}$$

$$\begin{array}{r} 74 \\ + 26 \\ \hline \end{array}$$

$$\begin{array}{r} 43 \\ + 48 \\ \hline \end{array}$$

$$\begin{array}{r} 97 \\ + 33 \\ \hline \end{array}$$

$$\begin{array}{r} 65 \\ + 16 \\ \hline \end{array}$$

$$\begin{array}{r} 87 \\ + 23 \\ \hline \end{array}$$

$$\begin{array}{r} 32 \\ + 66 \\ \hline \end{array}$$

$$\begin{array}{r} 58 \\ + 68 \\ \hline \end{array}$$

$$\begin{array}{r} 72 \\ + 38 \\ \hline \end{array}$$

$$\begin{array}{r} 24 \\ + 67 \\ \hline \end{array}$$

$$\begin{array}{r} 86 \\ + 56 \\ \hline \end{array}$$

$$\begin{array}{r} 59 \\ + 49 \\ \hline \end{array}$$

Q7. Multiply the following sums:-

$$\begin{array}{r} 21 \\ \times 1 \\ \hline \end{array}$$

$$\begin{array}{r} 24 \\ \times 2 \\ \hline \end{array}$$

$$\begin{array}{r} 33 \\ \times 3 \\ \hline \end{array}$$

$$\begin{array}{r} 32 \\ \times 2 \\ \hline \end{array}$$

$$\begin{array}{r} 42 \\ \times 2 \\ \hline \end{array}$$

$$\begin{array}{r} 52 \\ \times 3 \\ \hline \end{array}$$

$$\begin{array}{r} 61 \\ \times 2 \\ \hline \end{array}$$

$$\begin{array}{r} 71 \\ \times 1 \\ \hline \end{array}$$

$$\begin{array}{r} 31 \\ \times 1 \\ \hline \end{array}$$

$$\begin{array}{r} 74 \\ \times 2 \\ \hline \end{array}$$

$$\begin{array}{r} 34 \\ \times 2 \\ \hline \end{array}$$

$$\begin{array}{r} 62 \\ \times 4 \\ \hline \end{array}$$

$$\begin{array}{r} 54 \\ \times 2 \\ \hline \end{array}$$

$$\begin{array}{r} 81 \\ \times 1 \\ \hline \end{array}$$

$$\begin{array}{r} 82 \\ \times 2 \\ \hline \end{array}$$

$$\begin{array}{r} 91 \\ \times 3 \\ \hline \end{array}$$

$$\begin{array}{r} 94 \\ \times 2 \\ \hline \end{array}$$

$$\begin{array}{r} 43 \\ \times 3 \\ \hline \end{array}$$

$$\begin{array}{r} 53 \\ \times 2 \\ \hline \end{array}$$

$$\begin{array}{r} 52 \\ \times 2 \\ \hline \end{array}$$

Q8. Let make some fun ,complete the Sudoku :-

$$7 - \square = 2$$

$$2 + \square = 8$$

$$\begin{array}{c} + \\ 4 \\ = \end{array}$$

$$\begin{array}{c} - \\ 3 \\ = \end{array}$$

$$\square - \square = 3$$

$$\square + 1 = \square$$

$$\begin{array}{c} + \\ 2 \\ = \end{array}$$

$$\begin{array}{c} - \\ \square \\ = \end{array}$$



$$\square - \square = 1$$

$$\begin{array}{c} - \\ \square + 3 = 6 \\ = \end{array}$$

$$\begin{array}{c} + \\ 6 \\ = \end{array}$$

$$\square + 7 = \square$$

$$\square - 8 = \square$$

$$\begin{array}{c} - \\ 4 \\ = \end{array}$$

$$5 - \square = \square$$

Subject:- EVS

Clothes We Wear

I. Fill in the blanks with the given words:-

(warm, protect, cotton, raincoat, gumboots)



1. Clothes _____ us from heat, cold and rain.
2. We wear _____ clothes in summer.
3. Woollen clothes keep us _____.
4. We use a _____ and _____ when it rains.



II. Write "true" or "false"

1. Cotton clothes keep us cool. (_____)
2. We wear woollen clothes during rainy season. (_____)
3. We wear different clothes at different times of the year. (_____)



III. Identify the clothes and name the seasons.



Plants around us

Fill in the blanks

Cooking, seeds, furniture, fibres

1. We get oil from the _____ of plants.
2. Oil is used for _____ food.
3. _____ are used to make thread.
4. Wood is used to make _____

• **Tick (✓) the correct answer.**

1. Most of the food we eat comes from _____
a) Animals b) plants c) soil
2. Cereals and pulses are _____
a) Food grains b) vegetables c) flowers
3. Spices give flavor to our _____
a) Perfume b) cereals c) food
4. Jaggery is made from _____
a) Sugarcane b) potato c) Sweet potato
5. Wheat, rice maize and barley are _____
a) Pulses b) spices c) cereals

• **Write 'T' for true and 'F' for false statements.**

1. Plants give us tea, coffee and sugar.
2. Potato and ginger are roots that we eat.
3. We get cotton from cotton plant.

Animals around us

1. Fill in the blanks with the correct words.

- a. The _____ (dog / lion) is a wild animal.
- b. A _____ (Monkey / Crocodile) lives both on land and in water.
- c. Animals such as _____ (Vulture / snake) eat the flesh of dead animals.

2. Give two examples of each.

- a. Animals that eat plants.
- b. Animals that eat the flesh of animals.
- c. Animals that eat dead animals.

3. Identify and write the answer.



Name the animal

Eat plant or flesh?

is it domestic or wild animal?

Where do you see this animal?

It's time to fun

Let find the terms in the given grid and colour them with different colours.





















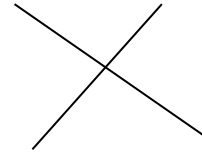
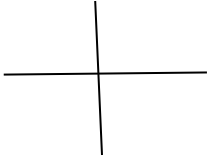
KIDPID.COM

K	H	Q	E	C	F	W	D	B	U
R	B	U	L	L	I	F	Z	W	T
V	S	L	E	I	G	L	E	R	I
J	D	H	P	A	O	D	B	H	G
A	G	O	H	T	R	N	R	E	E
G	S	N	A	K	E	R	A	O	R
U	K	A	N	G	A	R	O	O	T
A	J	M	T	M	O	N	K	E	Y
R	G	I	R	A	F	F	F	V	X

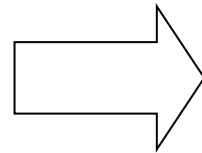

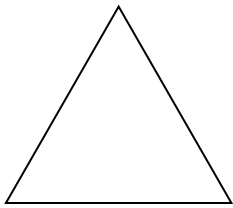
Subject – Computer

• **Tick the correct option.**



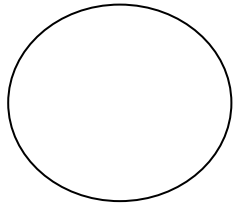
1. Which of the following symbol is used to add a new character?



2. Which shape is used to make curved shapes?



3. Which shape is used for a drawing a rectangle?



• **Ture(T) / False(F) :-**

1. Tools group contains different colours.



2. Colours group contain different shapes.



3. Stage is the main working area.



4. Blocks Palette display different types of blocks.

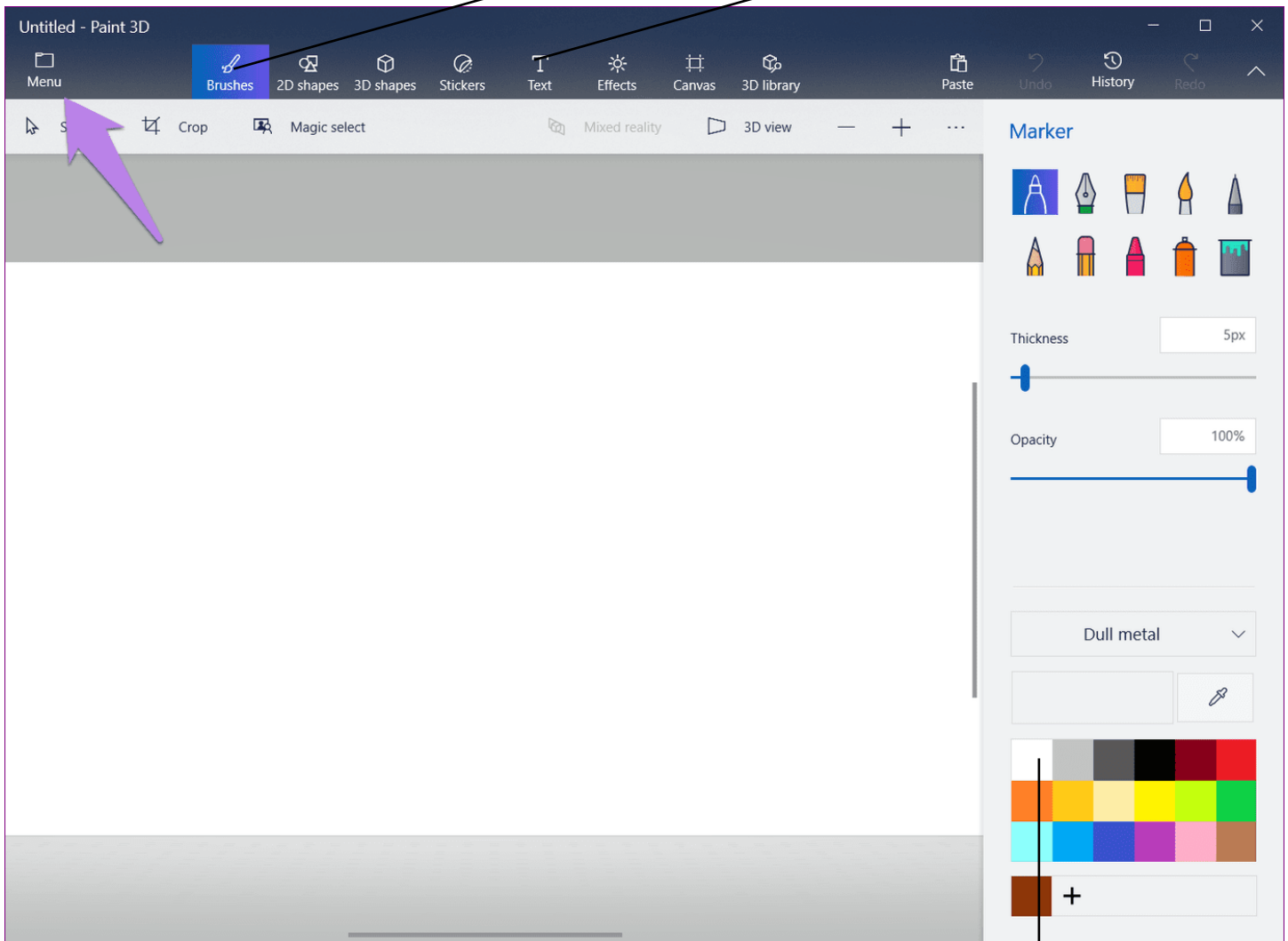


- Answer the following questions.

1. Which button is used to click to save the project?

2. Which groups has brush tool?

- Label the picture



English

Learn and write word meaning and question answer of chapter 9th and 10th and learn book exercise also .

Hindi

Learn and write word meaning and question answer of chapter 9th and 10th and learn book exercise also .

EVS

Learn and write word meaning and question answer of chapter 12th, 13th and 14th and learn book exercise also .

G.K.

Learn chapter 24th to 30th.

ENJOY THE HOLIDAYS